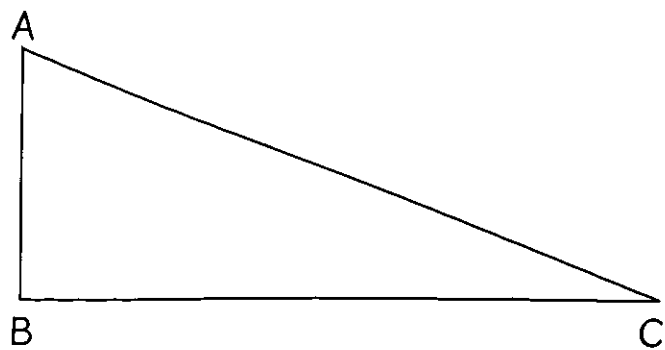


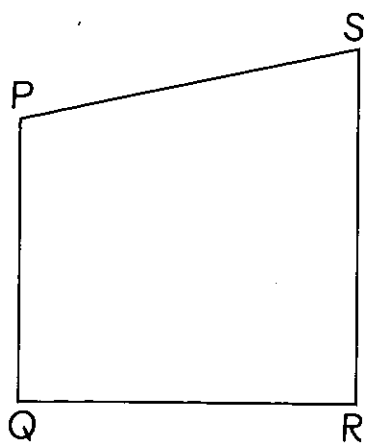
2 Name the sides that are perpendicular in each shape.

(a)



is perpendicular to .

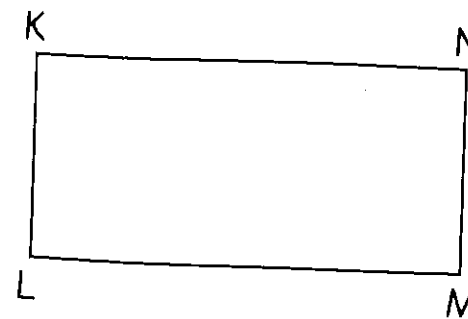
(b)



is perpendicular to .

is perpendicular to .

(c)



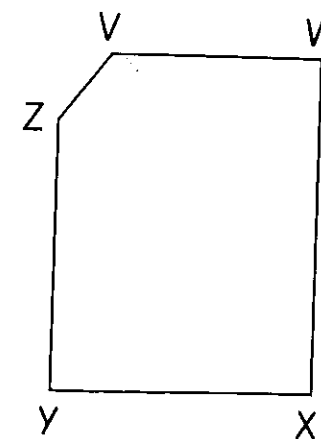
is perpendicular to .

is perpendicular to .

is perpendicular to .

is perpendicular to .

(d)



is perpendicular to .

is perpendicular to .