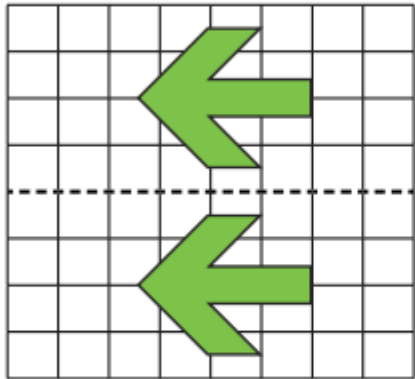
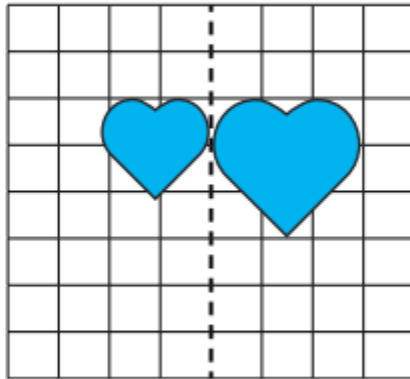


1) Which shape has not been reflected?

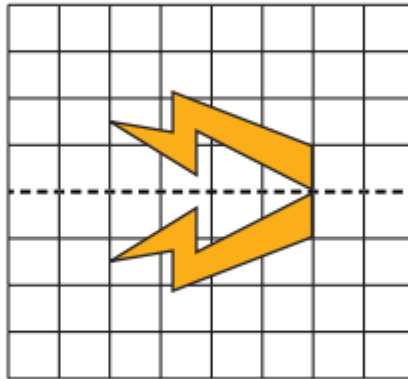
a)



b)



c)

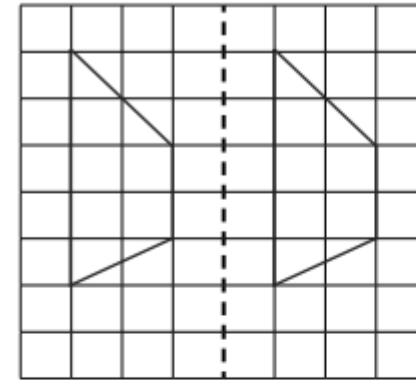


What is the mistake?

1) **B.** The shapes are not congruent. One heart is larger than the other.

2)

Shani and Kyle are reflecting shapes.



The trapezium has been reflected correctly.



This shape has not been reflected.

Who do you agree with and why?

I agree with \_\_\_\_\_ because \_\_\_\_\_

\_\_\_\_\_

\_\_\_\_\_

*I agree with Kyle because each corresponding vertex of the trapezium should be the same distance from the mirror line. The trapezium has been translated rather than reflected.*