

7. a) 16 photos.

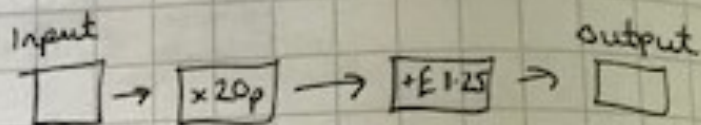
Each photo costs 20p.

$$16 \times 20p = \text{£}3.20$$

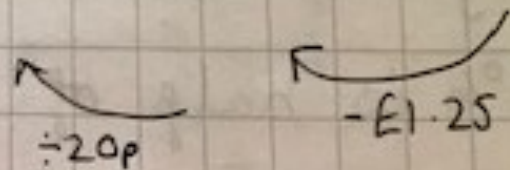
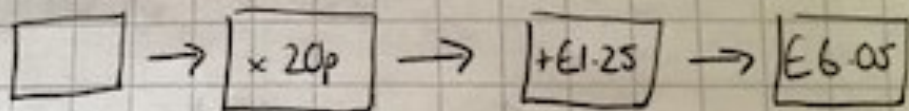
Then add £1.25 for delivery.

$$\begin{array}{r} \text{£} 3.20 \\ + \text{£} 1.25 \\ \hline \text{£} 4.45 \end{array}$$

The rule was



b) Paid £6.05



24

£4.80

So she must have bought 24 photos.