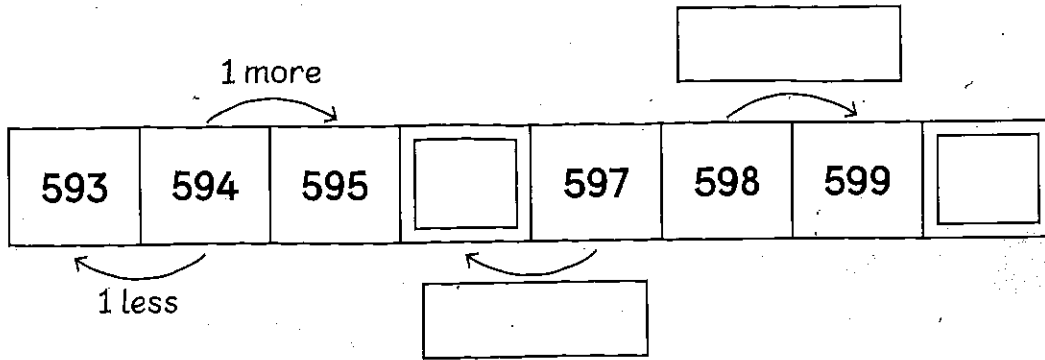
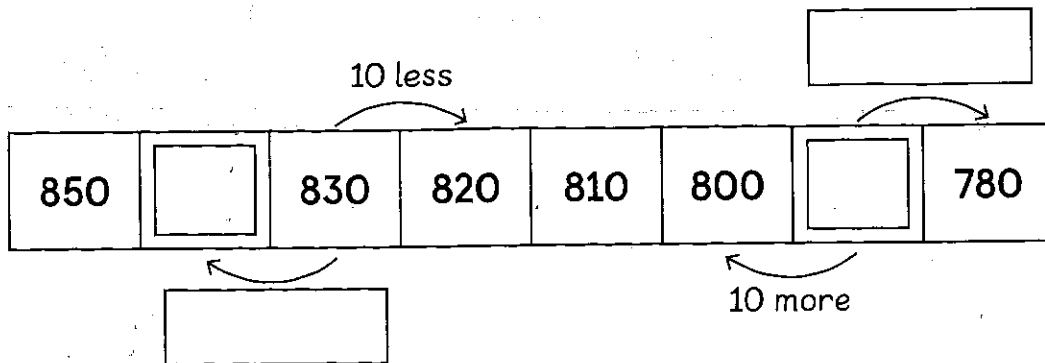


Look at each number pattern and fill in the blanks.

(a)



(b)



Complete the number patterns.

(a) 169, 170, 171, , , 174

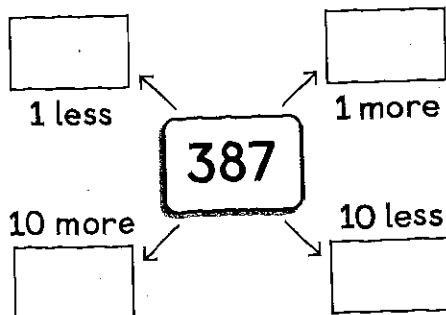
(b) 623, , 621, 620, , 618, 617

(c) 180, 190, 200, , 220, 230,

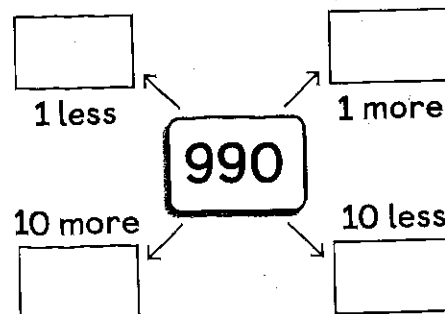
(d) , 400, 401, 402, , 404

(e) , , 880, 870, 860, 850

(a)

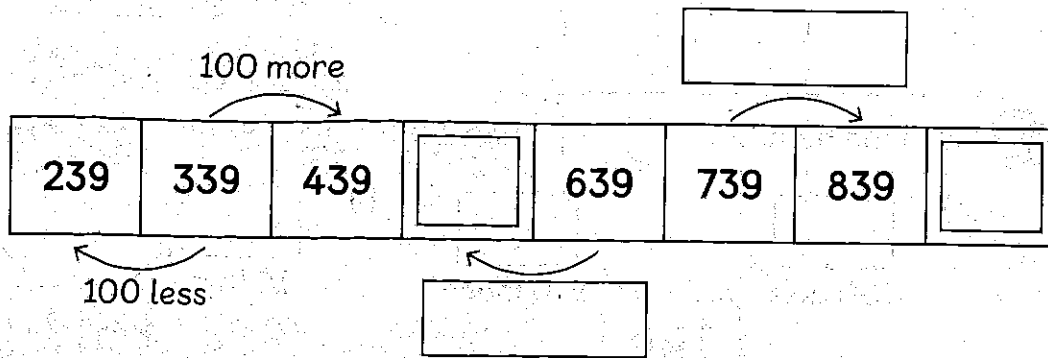


(b)

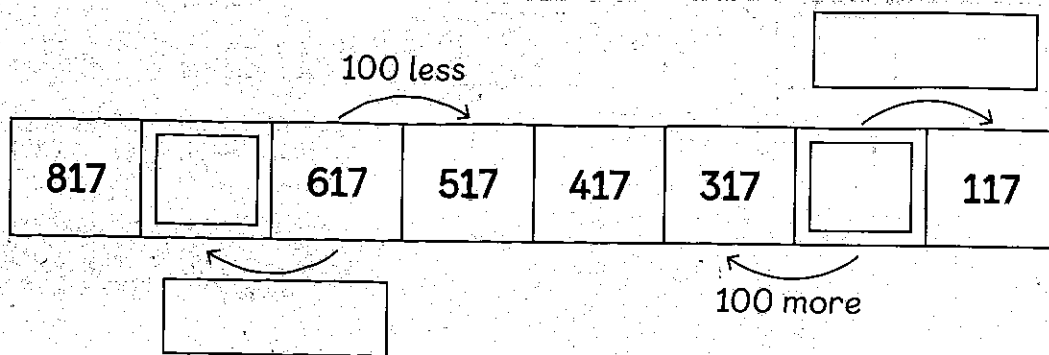


Look at each number pattern and fill in the blanks.

(a)



(b)



Look at each number pattern and fill in the blanks.

(a) 90, [], 290, 390, [], 590, 690

Each number is [] more than the number before it.

(b) 925, 825, 725, [], [], 425, 325

Each number is 100 [] than the number before it.

(c) [], 900, 800, 700, [], 500, 400

Each number is [] less than the number before it.

Fill in the blanks.

