

Name: \_\_\_\_\_ Class: \_\_\_\_\_ Date: \_\_\_\_\_


### Worksheet 1

#### Grouping Equally

1 Circle.


Write the missing numbers.

- (a) There are 12 fish.  
Circle groups of 2.




There are  groups of 2 fish.

- (b) There are 16 whales.  
Circle groups of 4.




There are  groups of 4 whales.

- (c) There are 14 birds.  
Circle groups of 7.



There are  groups of 7 birds.


- (d) There are 20 pelicans.  
Circle groups of 5.



There are  groups of 5 pelicans.


- 2 Circle to show equal groups.  
Write the missing numbers.

- (a) Emma buys 15 flowers.  
She puts 3 flowers in each vase.  
How many vases does she need?




She needs  vases.

- (b) A shopkeeper has 18 oranges.  
He puts 2 oranges in each bag.  
How many bags does he need?




He needs  bags.

- (c) There are 20 marbles.  
Sam puts 4 marbles in each box.  
How many boxes does Sam need?



Sam needs  boxes.

- (d) 8 books can be put on one shelf.  
Ravi has 16 books.  
How many shelves does Ravi need to hold all his books?



Ravi needs  shelves.