

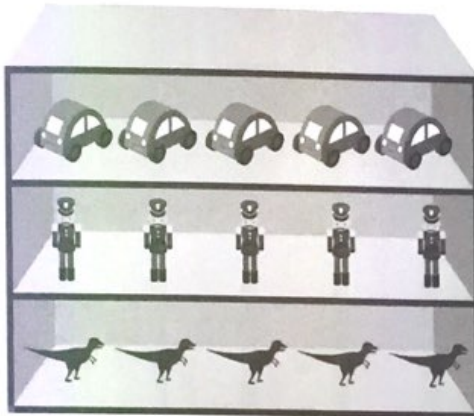
Name: \_\_\_\_\_ Class: \_\_\_\_\_ Date: \_\_\_\_\_

## Worksheet 2

### Sharing Equally

1 Write the missing numbers.

(a)



There are  toys altogether.

There are  shelves.

There are  toys on each shelf.

(b) There are  apples in all.

There are  trees.

There are  apples on each tree.



(c)



There are  fish altogether.

There are  bowls.

There are  fish in each bowl.

(d)



There are  pencils in all.


There are  holders.

There are  pencils in each holder.

2


Draw to complete the groups.  
Write the missing numbers.

- (a) There are 6 doughnuts.  
Put them equally into 2 boxes.




There are  doughnuts in each box.

- (b) There are 10 cookies.  
Put them equally into 5 jars.




There are  cookies in each jar.

(c) Put 9 cherries equally onto 3 cupcakes.



There are  cherries on each cupcake.

(d) Put 12 tomatoes equally in 6 boxes.



There are  tomatoes in each box.


3 Write the missing numbers.

- (a) Lulu has 10 oranges.  
She puts an equal number of oranges in 2 baskets.  
How many oranges are there in each basket?




There are  oranges in each basket.

- (b) There are 9 ice lollies.  
3 boys share the ice lollies equally.  
How many ice lollies does each boy get?



Each boy gets  ice lollies.

- (c) Holly has 12 carrots.  
She gives each of her 3 rabbits an equal number of carrots.  
How many carrots does Holly give each rabbit?



Holly gives each rabbit  carrots.

### Mind Workout

Date: \_\_\_\_\_



Put the stars in 3 equal groups.

There are  stars in each group.