

Reading the time on the clock to the nearest five minutes

Mathematics

Miss Sabzvari

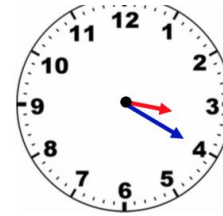


Independent Task

- Who has read the time correctly?
- Explain your choice



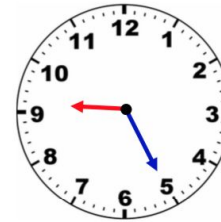
It's quarter past four.



It's twenty past three.



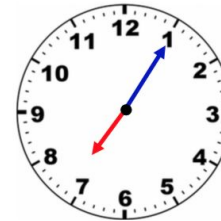
It's twenty five past nine.



It's five past nine.



It's five past seven.



It's one past seven.

