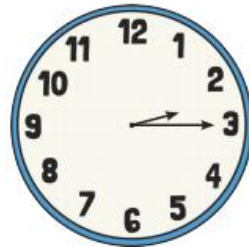


9.2.21 I can tell and show the time to quarter past the hour.

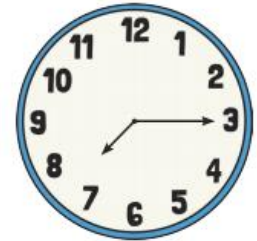
Match the clocks to the correct time.



Half past 8



Half past 4



Quarter past 2




Quarter past 3



Quarter past 7



Complete the table.

<p>The minute hand is pointing to ____ The hour hand is just after ____ The time is quarter ____ seven</p>		<p>The minute hand is pointing to three. The hour hand is just after six. The time is quarter past six</p>	
<p>The minute hand is pointing to three. The hour hand is just after 4. The time is quarter past four.</p>		<p>The minute hand is pointing to three. The hour hand is just after 12. The time is quarter past twelve.</p>	