
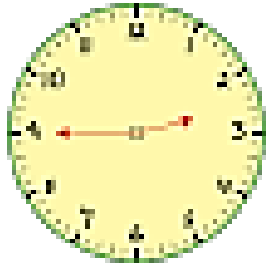
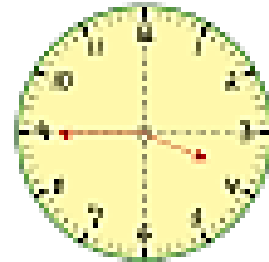
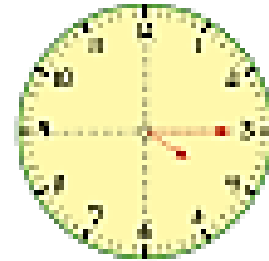


Match the clocks to the correct time..



Quarter to four
Quarter past four
Quarter to three
Quarter past three



10.2.21

I can tell and show the time to quarter to the hour.

The minute hand is pointing to _____.
The hour hand is just before _____.

The time is *quarter* _____ *two*.



The minute hand is pointing to nine.
The hour hand is just _____ twelve.


The time is *quarter to* twelve.



shutterstock - 233125909


The minute hand is pointing to _____.
The hour hand is just before _____.

The time is *quarter* _____ *five*.



The minute hand is pointing to nine.
The hour hand is just _____ eight.

The time is *quarter to* eight.



shutterstock - 233125909