














# 0-19 Maya Number System

Can you work out these Maya numbers? Use the key to help you.




 <input type="text"/>	 <input type="text"/>	 <input type="text"/>
 <input type="text"/>	 <input type="text"/>	 <input type="text"/>
 <input type="text"/>	 <input type="text"/>	 <input type="text"/>
 <input type="text"/>	 <input type="text"/>	 <input type="text"/>



Add up the value of each symbol.  
 $1 + 1 = 2$

$5 + 5 + 5 = 15$

Then simply combine the two totals!  
 $5 + 5 + 5 + 1 + 1 = ?$

Key	
	0
	1
	5