

Roald Dahl Maths

UKS2 Challenge Cards



Roald Dahl Maths UKS2 Challenge Cards



1. Mr Fox's tail measured 21.7cm. When Boggis, Bunce and Bean shot at him, he lost 18.9cm of it. How long is Mr Fox's tail now?



Roald Dahl Maths UKS2 Challenge Cards



2. Charlie Bucket ate 3 bowls of cabbage soup. If there are 365 days in a year, how many bowls of cabbage soup in a year?

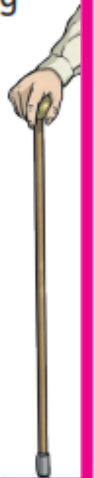
He ate 3 bowls of cabbage soup each day!



Roald Dahl Maths UKS2 Challenge Cards




3. Mrs Twit's walking stick measured 85cm. Mr Twit added 4cm of wood to Mrs Twit's walking stick every day for 9 days. How long is Mrs Twit's walking stick now?





4. The Centipede has 45 pairs of feet. Each pair of boots he buys costs him £8. How much will he need to spend on boots?




5. George's Grandma is three times older than George's dad. George's dad is 5 times older than George. George is 8 years old. How old is Grandma?



6. Mike Teavee watches 133 hours of television every week. On average, how many hours is that per day?



7. Tins of spaghetti cost 38p. How many tins could Mrs Twit buy with £5 to mix with worms for Mr Twit's dinner? Would she have any change?





8. Miss Trunchbull's record for drop-kicking naughty children was 93.78 metres. Today, she managed to kick a child 48.23 metres further. How far did she drop-kick the child?



9. There were 508 books in the library. Matilda had read $\frac{1}{4}$ of them. How many of the books had she read?



10. Willy Wonka had up between 80 and 100 Oompa-Loompas working for him. When he asked them to work in teams of 4, he had 3 left over. When he asked them to work in teams of 5, he had 2 left over. How many Oompa-Loompas does Willy Wonka have working for him?

