




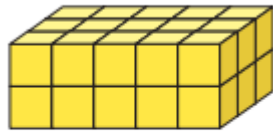
There are 14 cubes in the cuboid.



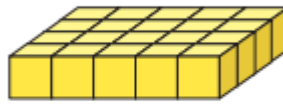
Explain Teddy's mistake.

Here are two cuboids made of 1 cm^3 cubes.

A



B



Which shape has the greater volume? _____

Show all your working to prove your answer.