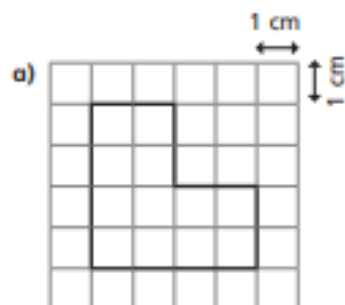
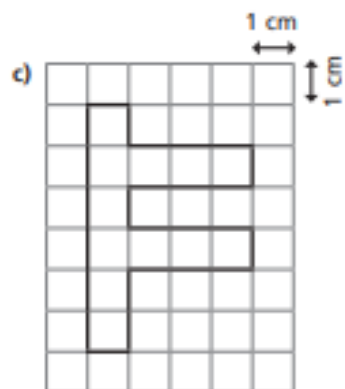
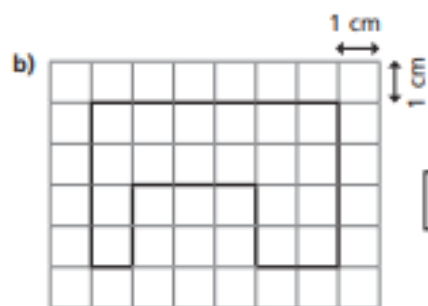


Area of compound shapes

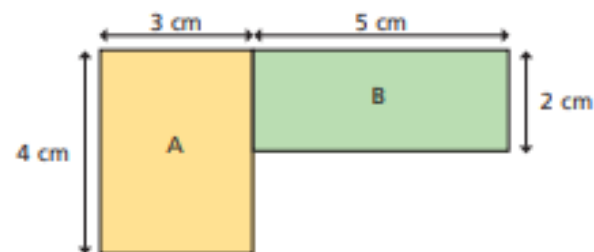
- 1 On the grid, the area of each square is 1 cm^2 .
Calculate the area of each shape.







2



- a) Work out the area of rectangle A

area =

- b) Work out the area of rectangle B

area =

- c) Work out the area of the compound shape.

area =

Talk about it with your partner.

3

- Work out the area of each of the following shapes.
Show all your working.

