

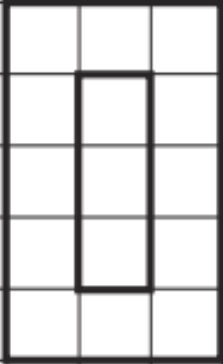
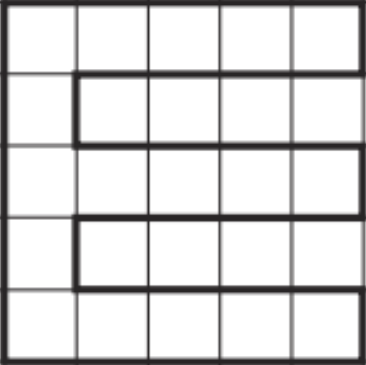
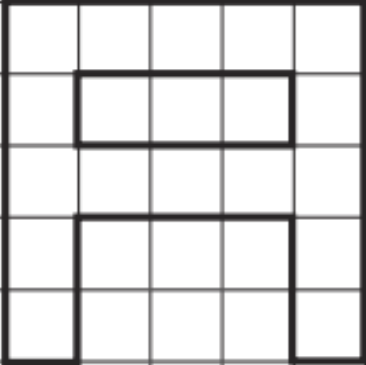


# Calculating the Area of Shapes by Counting Squares

Count the squares to find the area of the letter shapes.

Top tip – make a mark in each square you have counted to save you counting it twice.

		
1. Area = ____ cm <sup>2</sup>	2. Area = ____ cm <sup>2</sup>	3. Area = ____ cm <sup>2</sup>
		
4. Area = _____ cm <sup>2</sup>	5. Area = _____ cm <sup>2</sup>	

Now have a go at drawing some of the letters in your name as compound shapes. What is the area of each letter?

