







# Counting Fruit

It is the end of the week and these are the fruits and vegetables left over from snack time at school. Create a tally chart to show what is left.



Tally Chart		
	Tally	Total
		
		
		
		
		

Now put your data into a pictogram. Draw the fruits into the boxes.

A pictogram showing \_\_\_\_\_

<b>banana</b>	<b>carrot</b>	<b>tomato</b>	<b>apple</b>	<b>pear</b>

# Questions

Answer these questions using your tally chart and pictogram:

1. How many bananas were left?

---

2. How many pears were left?

---

3. How many tomatoes and carrots were left altogether?

---


4. Which fruit had the fewest number of pieces left?






---

5. How many fruits and vegetables were left altogether?























---

# Answers



Tally Chart		
	Tally	Total
		7
		5
		4
		2
		4

A pictogram showing the fruit left over at the end of the week.

				
				
				
				
				
				
				
<b>banana</b>	<b>carrot</b>	<b>tomato</b>	<b>apple</b>	<b>pear</b>

- How many bananas were left?  
**7**
- How many pears were left?  
**4**
- How many tomatoes and carrots were left altogether?  
**9**
- Which fruit had the least number of pieces left?  
**apples**
- How many fruits and vegetables were left altogether?  
**22**