


# Viking Word Problems

## Challenge Cards




### Viking Word Problem Challenge Cards

1. One oar costs 95 coins and I bought two. If I paid with 500 coins, how much change would I receive?




### Viking Word Problem Challenge Cards

2. I bought 135 metres of red fabric and 60 metres of white fabric to make a Viking sail. I have used 18 metres of the red fabric and 20 metres of white fabric. How many metres of fabric do I have left in total?



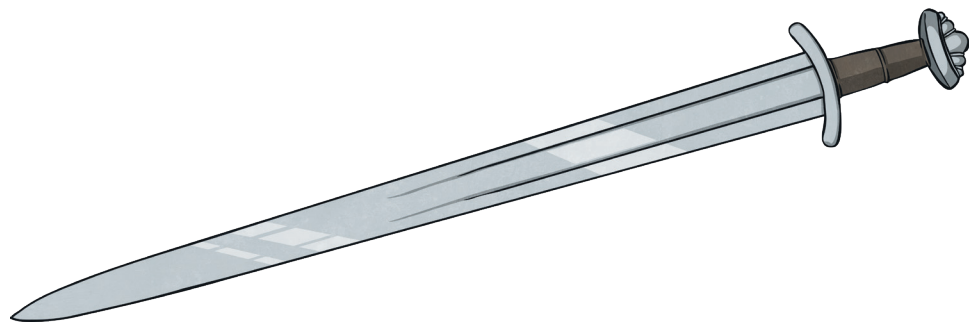
### Viking Word Problem Challenge Cards

3. You bought 3 items from the Viking market, each costing 250 coins. You paid with 2000 coins. How much change did you get?



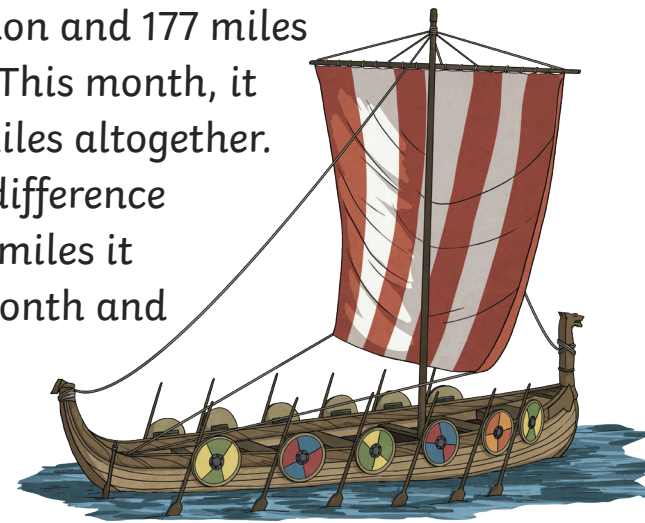
Viking Word Problem Challenge Cards

4. The Viking ship took 50 shields and 125 swords for its voyage. They lost 13 swords overboard. How many items do they have left onboard the ship?



Viking Word Problem Challenge Cards

5. Last month, the Viking ship sailed 106 miles to one destination and 177 miles to the other. This month, it sailed 280 miles altogether. What is the difference between the miles it sailed this month and last month?




Viking Word Problem Challenge Cards

6. Helmets at the market cost 10 coins each. A Viking family has 25 coins. How much more money do they need to raise to afford 4 helmets?



Viking Word Problem Challenge Cards

7. A Viking has 18 pieces of bread. He gives 3 away. He shares the rest with 5 friends. How many pieces of bread will each friend get?



Viking Word Problem Challenge Cards

8. There are 969 Vikings in one settlement and 1259 in another. 1860 Vikings set sail on a longship. How many Vikings are left behind?



Viking Word Problem Challenge Cards

9. The Vikings have 4653 coins to spend this year to improve the settlement. They have spent 3827 coins so far. The Viking chieftain gives another 670 coins.



How many more coins do they have left to spend?

Viking Word Problem Challenge Cards

10. On a voyage, a Viking crew sees 5 red birds and 7 times as many blue birds. How many birds did they see in all?



Viking Word Problem Challenge Cards

11. The table shows how many miles some Vikings travelled this week. How many more miles did they travel on Monday and Tuesday together than on Friday?

Monday	20 miles
Tuesday	3 miles
Wednesday	17 miles
Thursday	9 miles
Friday	11 miles

# Viking Word Problems Challenge Cards **Answers**

1. 310 coins
2. 157 metres
3. 1250 coins
4. 162 items
5. 3 miles
6. 15 coins
7. 3 pieces
8. 368 Vikings
9. 1496 coins
10. 40 birds
11. 12 miles